

Name : \_\_\_\_\_

Score : \_\_\_\_\_

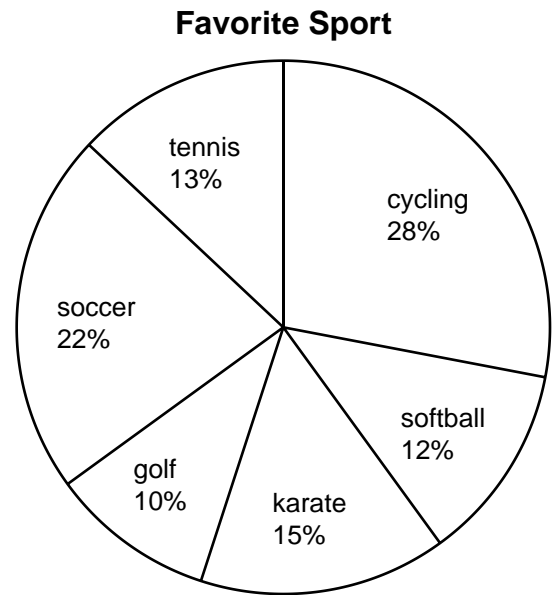
Teacher : \_\_\_\_\_

Date : \_\_\_\_\_

## Reading Pie Graphs

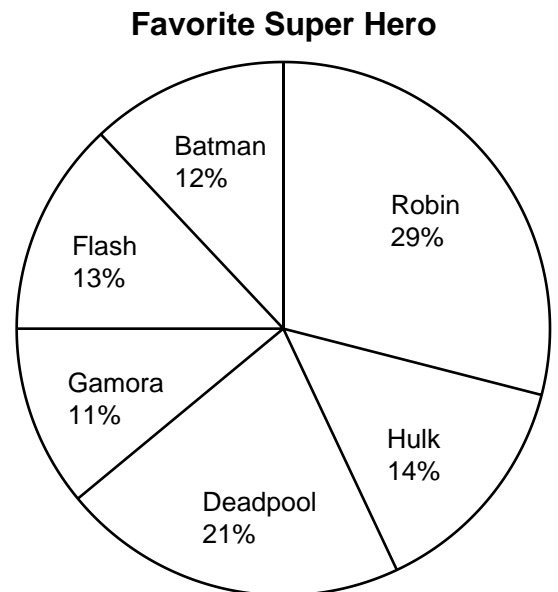
**One high school tracked its students's favorite sports by having the kids vote.  
Answer the questions based on the pie graph below.**

- 1) What percent of students picked either tennis or softball? \_\_\_\_\_
- 2) Were golf and cycling chosen more than karate and soccer; or are they equally popular? \_\_\_\_\_
- 3) Combined, which two sports were the most popular among students? \_\_\_\_\_
- 4) Between golf and cycling which sport is more popular; or are they equally popular? \_\_\_\_\_
- 5) If there were 200 students who voted, how many voted for soccer? \_\_\_\_\_



**A local comic book store tracked fans' favorite superheroes by having them vote.  
Answer the questions based on the pie graph below.**

- 1) Between Flash and Batman which hero is more popular; or are they equally popular? \_\_\_\_\_
- 2) Were Flash and Batman chosen more than Hulk and Robin; or are they equally popular? \_\_\_\_\_
- 3) What percent of fans voted for either Deadpool or Gamora? \_\_\_\_\_
- 4) If there were 300 fans who voted, how many voted for Robin? \_\_\_\_\_
- 5) Combined, which two heroes had the greatest number of votes? \_\_\_\_\_



Name : \_\_\_\_\_

Score : \_\_\_\_\_

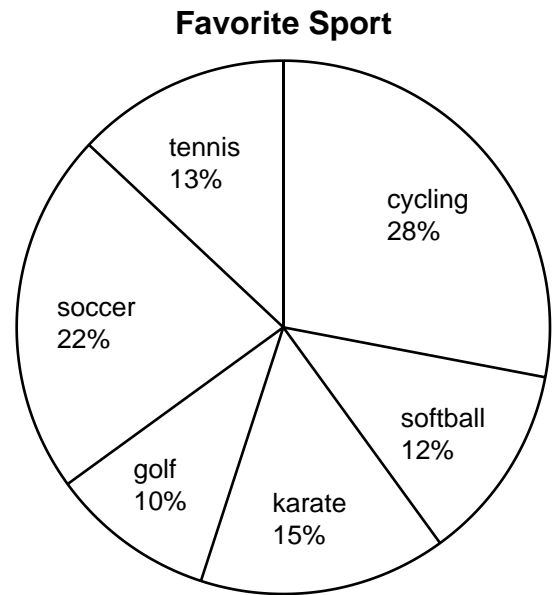
Teacher : \_\_\_\_\_

Date : \_\_\_\_\_

## Reading Pie Graphs

One high school tracked its students's favorite sports by having the kids vote.  
Answer the questions based on the pie graph below.

- 1) What percent of students picked either tennis or softball? 25%
- 2) Were golf and cycling chosen more than karate and soccer; or are they equally popular? golf & cycling
- 3) Combined, which two sports were the most popular among students? cycling & soccer
- 4) Between golf and cycling which sport is more popular; or are they equally popular? cycling
- 5) If there were 200 students who voted, how many voted for soccer? 44



A local comic book store tracked fans' favorite superheroes by having them vote.  
Answer the questions based on the pie graph below.

- 1) Between Flash and Batman which hero is more popular; or are they equally popular? Flash
- 2) Were Flash and Batman chosen more than Hulk and Robin; or are they equally popular? Hulk & Robin
- 3) What percent of fans voted for either Deadpool or Gamora? 32%
- 4) If there were 300 fans who voted, how many voted for Robin? 87
- 5) Combined, which two heroes had the greatest number of votes? Robin & Deadpool

