



Substitution






1

 = 4	 = 5
---	---



Use the given facts to work out the calculations.

a)  +  + 

b)  +  - 

c)  +  +  +  + 

2

 = 12	 = 5
--	---

Use the given facts to work out the calculations.

a)  - 

b)  × 

c) Create your own calculation that will be equal to 22

3 If $x = 5$, write the values of the expressions in the corresponding grid. The first one has been done for you.

$3x$	x^2	$2x - 5$
$4x + 2$	$\frac{x}{2}$	$2(x + 1)$
$7x$	$x + 9$	$x - 7$

15		

4 If $a = 10$ and $b = 6$, work out the values of the expressions.

a) $a + b =$

d) $2a + b =$

b) $a - b =$

e) $3a - 17 =$


c) $2a =$

f) $2(a - b) =$

5 If $m = \frac{4}{5}$ and $k = 0.1$, work out the value of $m + 2k$



6



Mo

It does not matter what p and q are, $p + q$ and $q + p$ will always give the same answer.

Do you agree with Mo? _____

Explain your answer.

7

$$m = 7 \quad n = 5$$

Write $>$, $<$ or $=$ to compare the expressions.

a) $2m$ 10

b) $n - 1$ 5

c) $2n + m$ $2m + n$

d) $7n$ $5m$

8

$$a = 10$$

Write the expressions in order, starting with the smallest value.

$$5a$$

$$a + 5$$

$$\frac{a}{5}$$

$$a^2$$

9

$$a = 15$$

Write three different algebraic expressions that give a value of 40

10

Complete the table.

x	$5x$	$5x - 1$
2		
10		
12		
	25	
		34
		99

