

PERIMETER

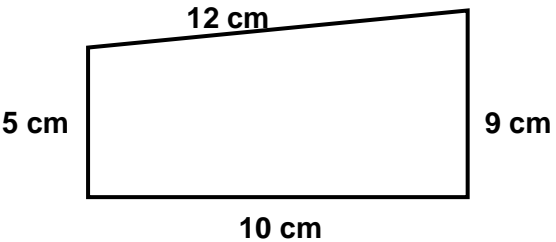
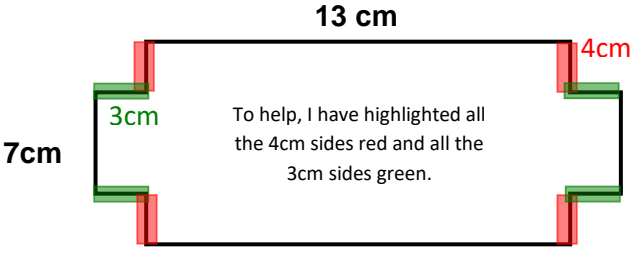
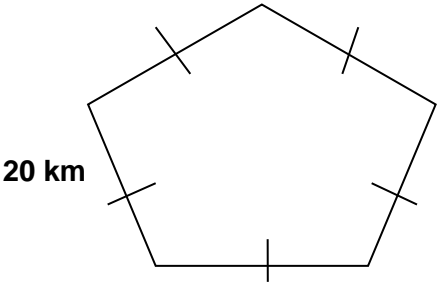
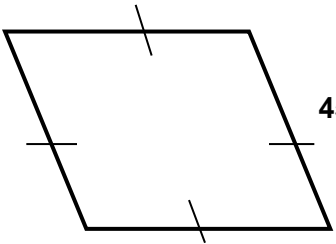
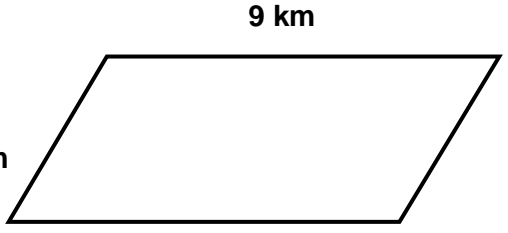
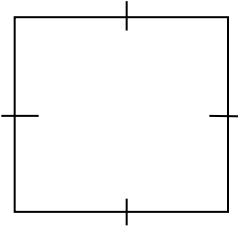

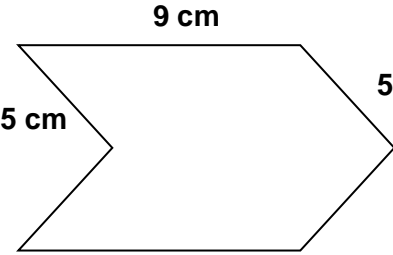
Please watch this link to help you with today's work:

<https://www.youtube.com/watch?v=6mopAggjkVM&app=desktop>

To calculate the perimeter of any shape, you must include **the length of ALL THE SIDES**.

If the side is not labelled with a length, it doesn't mean you can ignore it.

Please look at the other sides of the shape - these will tell you the length of those sides that have no length labelled.

 <p>Perimeter : _____</p>	 <p>Perimeter : _____ Note : you should have 12 lengths to add together</p>
 <p>Perimeter : _____</p>	 <p>Perimeter : _____</p>
 <p>Perimeter : _____</p>	 <p>Perimeter : _____</p>
 <p>Perimeter : _____</p>	 <p>Perimeter : _____</p>