



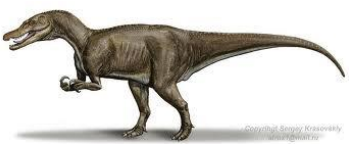



WALT: Solve problems involving perimeter.

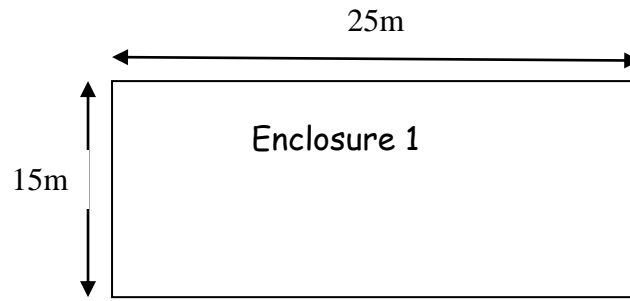
Drawings of different dinosaur enclosures have been given to Professor Lockhart. He needs to know which enclosures will fit the different dinosaurs. Can you help him by calculating the perimeter of each enclosure? Write inside each enclosure which dinosaurs could fit.

 <p>Stegosaurus needs a cage with a perimeter fence of at least 50m.</p>	 <p>T-Rex needs an enclosure of exactly 100m perimeter.</p>
 <p>Triceratops needs a cage with a perimeter bigger than 50m but smaller than 100m</p>	 <p>Brontosaurus needs a perimeter fence bigger than 100m</p>
 <p>Baryonyx needs a cage with a perimeter fence between 80m and 95m</p>	 <p>Velociraptor is a small dinosaur and needs a cage with a perimeter of less than 50m</p>

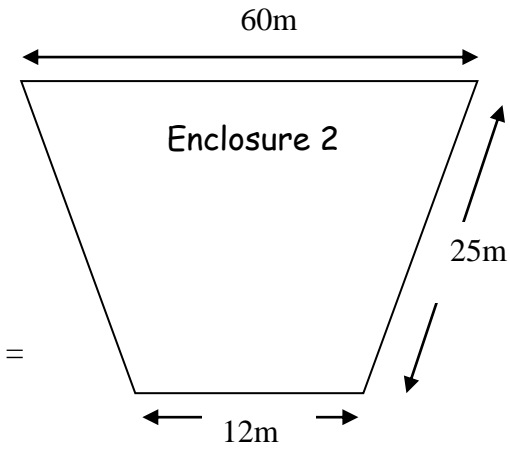
Ext: How many different rectangle enclosures can you draw which have a perimeter of 24m?

WALT: Solve problems involving perimeter.

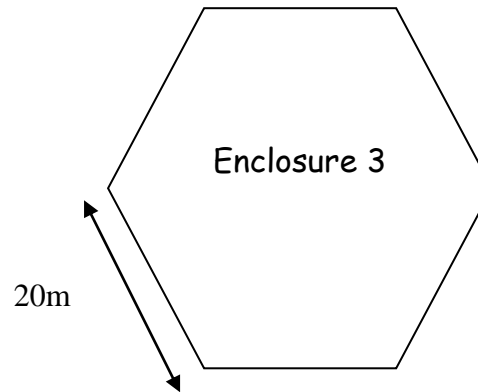
REMEMBER to show your working out.



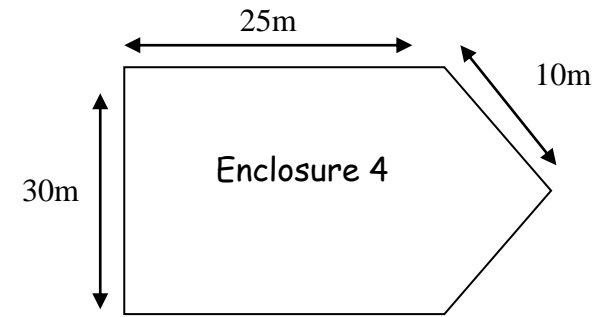
Perimeter =



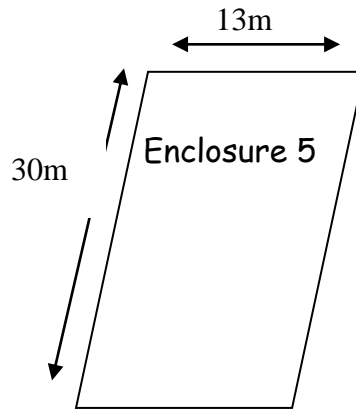
Perimeter =



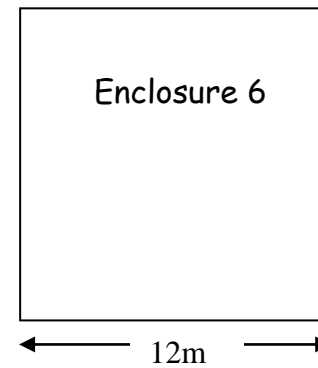
Perimeter =



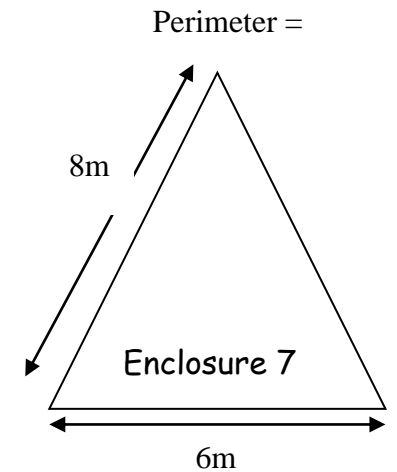
Perimeter =



Perimeter =



Perimeter =



Perimeter =