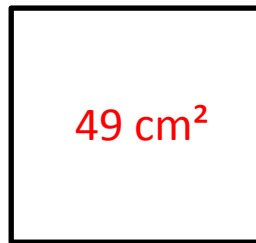


L.O : To calculate the area of shapes. (Remember to include the unit:  $\text{cm}^2$  within your answers)

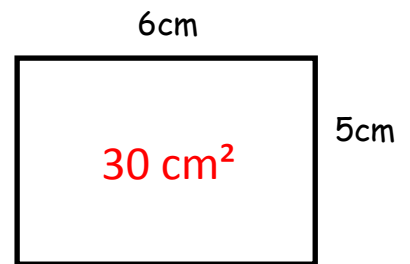
What is the area of this rectangle?



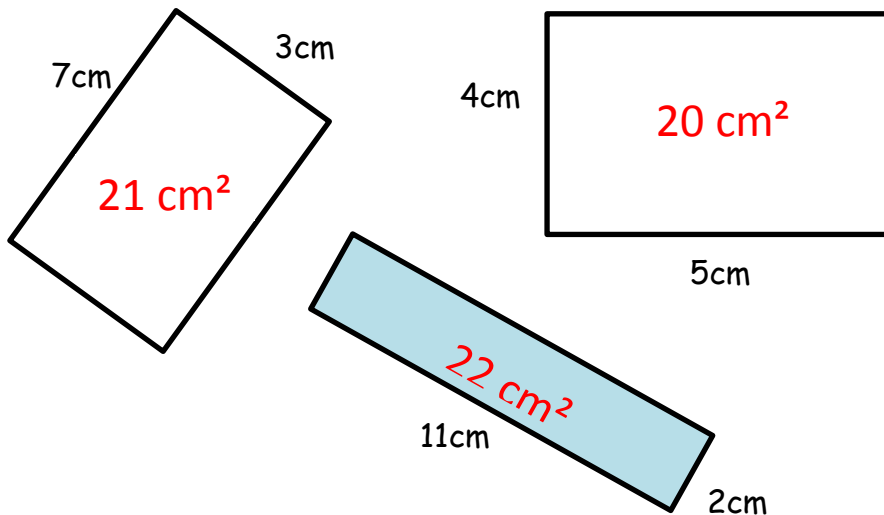
This square has sides of 7cm.  
What is its area?



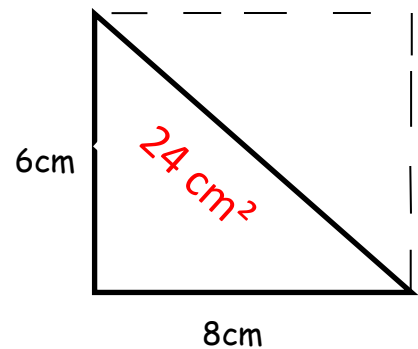
What is the total area of these 2 shapes?



Colour which of these rectangles has the largest area.



Find the area of this triangle.  
(Area of a triangle: we find the area as if it was a rectangle first, then we half our answer.)



Colour the shape/shapes which have an area of  $36 \text{ cm}^2$ .

**\*\*Area of the triangle:  $4 \times 10$ , then half the answer\*\***

