



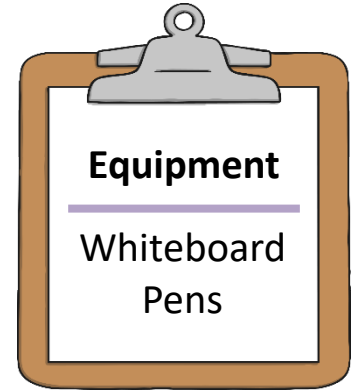
Morning Maths Activities

Short starter activities and games.

twinkl



Spider Sharing



How many spiders are there if there are:

13 spiders

23 spiders

15 spiders

157 spiders

Each spider eats 5 flies for supper. How many spiders can have supper if there are:

317 spiders

356 spiders

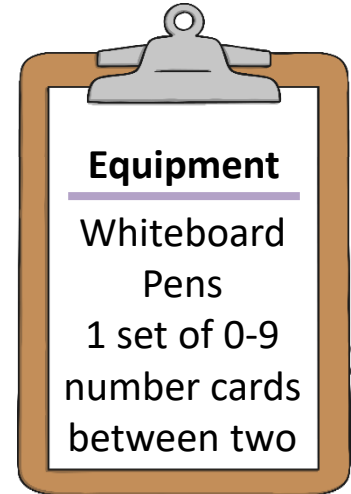
193 spiders

927 spiders

Hide
Answers



Out for a Duck



Use your digit cards to create two 5-digit numbers.

Add your two numbers together.


If your answer has a zero in it, you score 1 duck.

If your answer has two zeroes, you score two ducks.

If your answer has three zeroes, you score three ducks.

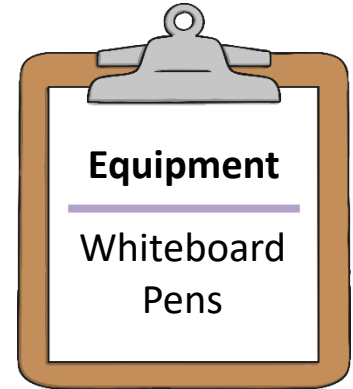
Take turns to create and add numbers.

How many ducks did you score?





Lottery Winnings



Each prize is shared between 12 lottery winners. How much does each winner get?

Images of money bag/treasure chests labelled

£35

£106

£518

£1211

If nine winners get £6582 each when they have shared the prize, what was the total amount won?

£59 238

Hide
Answers



Digit Difference Game



3-digit version for two or more players. Take it in turns to:

1. Throw 3 dice.
2. Use the numbers on the dice to write down a 3 digit number.
3. Reverse the digits and write down that second number.
4. Find the difference between the two numbers.



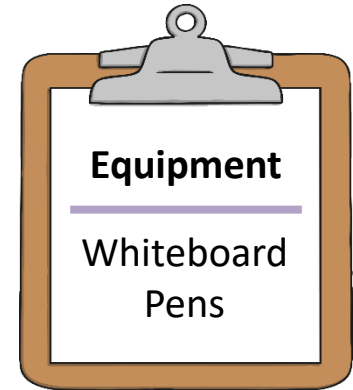
Alternatives:

1. Time it and see how many you can do in one minute. Work on improving your personal bests.
2. Try an easier version with two dice making two-digit numbers.
3. Try a harder version with four dice making four-digit numbers.

Example: Throw: 1 and 2 and 3. Calculation: $321 - 123 = 198$



Menus



The Pickled Pie Restaurant

Starters:

Garlic Bread £3.75

Soup £4.25

Nachos (for two) £6.95

Mains:

Pizza with two toppings £11.95

Macaroni Cheese £9.95

Spaghetti Bolognese £10.75

Burger and Chips – Meat £10.65 Veggie £9.65

Desserts:

Ice Cream £4.80

Apple Pie and Custard £5.95

Chocolate Fudge Cake £6.70

Cheesecake £6.75

Drinks:

Fizzy drinks from the machine £2.99

Fresh fruit juice (apple or orange) £3.50

Milkshake (banana/strawberry/chocolate) £4.50

Work in groups of 3 or 4.

1. Look at the menu on the left and choose what you would like to eat and drink.
2. Add up the total of everyone's order to find the total bill.
3. Split the bill equally between the number of people in your group to find out what you would pay each.