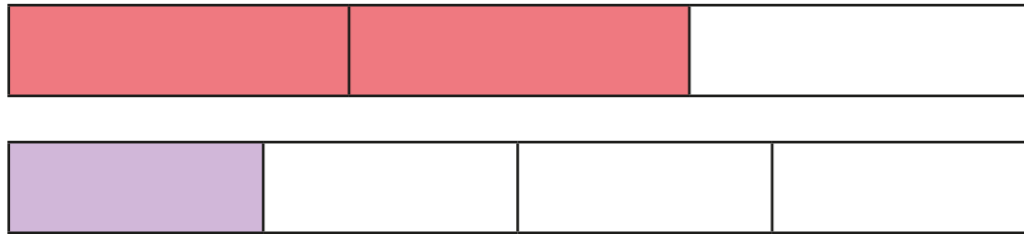



Add and subtract fractions (2)

1 Amir is using fraction strips to work out $\frac{2}{3} + \frac{1}{4}$



Amir says he needs to find a common denominator.

a) Complete Amir's method.



$$\frac{2}{3} = \frac{\square}{12}$$



$$\frac{1}{4} = \frac{\square}{12}$$

$$\frac{2}{3} + \frac{1}{4} = \frac{\square}{12} + \frac{\square}{12} = \frac{\square}{12}$$

b) Show the addition on the fraction strip.



c) Could you have used a different denominator?



2 What common denominator can you use to add the fractions?

a) $\frac{2}{5} + \frac{1}{2}$ Common denominator =

b) $\frac{2}{3} + \frac{4}{5}$ Common denominator =

c) $\frac{7}{8} - \frac{1}{4}$ Common denominator =

d) $\frac{7}{9} - \frac{1}{6}$ Common denominator =

e) $\frac{11}{15} + \frac{3}{10}$ Common denominator =

3 Ron and Eva are working out $\frac{1}{4} + \frac{5}{6}$

Ron's method

$$\frac{1}{4} + \frac{5}{6} = \frac{3}{12} + \frac{10}{12} = \frac{13}{12}$$

Eva's method

$$\frac{1}{4} + \frac{5}{6} = \frac{6}{24} + \frac{20}{24} = \frac{26}{24}$$

a) What is the same about Ron's and Eva's methods?

b) What is different about their methods?

c) Which method do you prefer? Why?





$\overline{\cdot}$ — •

— € — •

— € — •

— — •

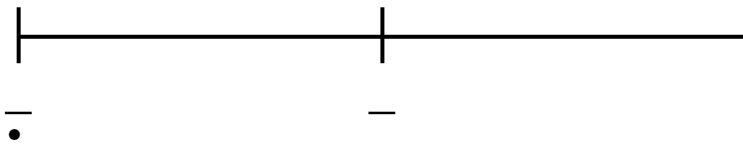
‰

š

‡

◁ š

œ



• œ š •

• • •

‡

\overline{f}	$\overline{\cdot}$