












Easter Egg Map (A)

What is the grid reference of each Easter egg?

	A	B	C	D	E	F	G	H	I
1									
2									
3									
4									
5									
6									
7									
8									
9									

How many Easter eggs are there?

How many  Easter eggs are there?

How many blanks are there?

Happy Easter from Math-Drills.Com!

Easter Egg Map (A) Answers

What is the grid reference of each Easter egg?

	A	B	C	D	E	F	G	H	I
1									
2				D2					
3	A3								
4							G4		
5		B5						H5	
6									
7							G7	H7	
8									I8
9	A9					F9	G9		

How many Easter eggs are there?

11

How many  Easter eggs are there?

3
















How many blanks are there?

70

Happy Easter from Math-Drills.Com!

Easter Egg Map (B)

What is the grid reference of each Easter egg?

	A	B	C	D	E	F	G	H	I
1									
2									
3									
4									
5									
6									
7									
8									
9									

How many Easter eggs are there?

How many  Easter eggs are there?

How many blanks are there?

Happy Easter from Math-Drills.Com!


Easter Egg Map (B) Answers

What is the grid reference of each Easter egg?

	A	B	C	D	E	F	G	H	I
1				D1	E1	F1			
2						F2			I2
3									
4			C4	D4			G4		I4
5					E5				
6	A6			D6				H6	
7									I7
8								H8	
9									

How many Easter eggs are there?

15

How many  Easter eggs are there?

1


















How many blanks are there?

66

Happy Easter from Math-Drills.Com!

Easter Egg Map (C)

What is the grid reference of each Easter egg?

	A	B	C	D	E	F	G	H	I
1									
2									
3									
4									
5									
6									
7									
8									
9									

How many Easter eggs are there?

How many  Easter eggs are there?

How many blanks are there?

Happy Easter from Math-Drills.Com!

Easter Egg Map (C) Answers

What is the grid reference of each Easter egg?

	A	B	C	D	E	F	G	H	I
1						F1			
2		B2					G2		
3				D3		F3			
4				D4		F4	G4	H4	
5		B5				F5			
6						F6			
7								H7	I7
8						F8			
9					E9		G9		

How many Easter eggs are there?

17

How many  Easter eggs are there?

2

















How many blanks are there?

64


Happy Easter from Math-Drills.Com!

Easter Egg Map (D)

What is the grid reference of each Easter egg?

	A	B	C	D	E	F	G	H	I
1									
2									
3									
4									
5									
6									
7									
8									
9									

How many Easter eggs are there?

How many  Easter eggs are there?

How many blanks are there?

Happy Easter from Math-Drills.Com!

Easter Egg Map (D) Answers

What is the grid reference of each Easter egg?

	A	B	C	D	E	F	G	H	I
1				D1	E1			H1	
2				D2	E2		G2	H2	I2
3							G3		
4					E4				I4
5				D5				H5	
6						F6	G6		
7									I7
8									
9									

How many Easter eggs are there?

16

How many  Easter eggs are there?

4





















How many blanks are there?

65

Happy Easter from Math-Drills.Com!

Easter Egg Map (E)

What is the grid reference of each Easter egg?

	A	B	C	D	E	F	G	H	I
1									
2									
3									
4									
5									
6									
7									
8									
9									

How many Easter eggs are there?

How many  Easter eggs are there?

How many blanks are there?

Easter Egg Map (E) Answers

What is the grid reference of each Easter egg?

	A	B	C	D	E	F	G	H	I
1		B1						H1	
2		B2		D2					
3		B3					G3		
4		B4		D4		F4	G4		
5									
6									
7	A7		C7				G7		I7
8	A8	B8						H8	
9				D9	E9	F9			

How many Easter eggs are there?

20

How many  Easter eggs are there?

1


















How many blanks are there?

61

Happy Easter from Math-Drills.Com!

Easter Egg Map (F)

What is the grid reference of each Easter egg?

	A	B	C	D	E	F	G	H	I
1									
2									
3									
4									
5									
6									
7									
8									
9									

How many Easter eggs are there?

How many  Easter eggs are there?

How many blanks are there?

Happy Easter from Math-Drills.Com!

Easter Egg Map (F) Answers

What is the grid reference of each Easter egg?

	A	B	C	D	E	F	G	H	I
1		B1			E1	F1		H1	
2									
3		B3							
4	A4							H4	I4
5			C5						I5
6								H6	I6
7			C7						
8			C8	D8					
9					E9				I9

How many Easter eggs are there?

17

How many  Easter eggs are there?

1
















How many blanks are there?

64


Happy Easter from Math-Drills.Com!

Easter Egg Map (G)

What is the grid reference of each Easter egg?

	A	B	C	D	E	F	G	H	I
1									
2									
3									
4									
5									
6									
7									
8									
9									

How many Easter eggs are there?

How many  Easter eggs are there?

How many blanks are there?

Happy Easter from Math-Drills.Com!

Easter Egg Map (G) Answers

What is the grid reference of each Easter egg?

	A	B	C	D	E	F	G	H	I
1						F1			
2			C2					H2	
3				D3					
4						F4		H4	
5			C5						
6		B6				F6		H6	
7				D7				H7	I7
8	A8		C8						
9									

How many Easter eggs are there?

15

How many  Easter eggs are there?

4



















How many blanks are there?

66

Happy Easter from Math-Drills.Com!

Easter Egg Map (H)

What is the grid reference of each Easter egg?

	A	B	C	D	E	F	G	H	I
1									
2									
3									
4									
5									
6									
7									
8									
9									

How many Easter eggs are there?

How many  Easter eggs are there?

How many blanks are there?

Happy Easter from Math-Drills.Com!

Easter Egg Map (H) Answers

What is the grid reference of each Easter egg?

	A	B	C	D	E	F	G	H	I
1		B1				F1			I1
2					E2	F2			I2
3							G3	H3	
4				D4					
5				D5			G5		I5
6					E6	F6			
7									I7
8		B8		D8				H8	
9									

How many Easter eggs are there?

18

How many  Easter eggs are there?

2











How many blanks are there?

63


Happy Easter from Math-Drills.Com!

Easter Egg Map (I)

What is the grid reference of each Easter egg?

	A	B	C	D	E	F	G	H	I
1									
2									
3									
4									
5									
6									
7									
8									
9									

How many Easter eggs are there?

How many  Easter eggs are there?

How many blanks are there?

Happy Easter from Math-Drills.Com!


Easter Egg Map (I) Answers

What is the grid reference of each Easter egg?

	A	B	C	D	E	F	G	H	I
1									
2						F2		H2	
3									
4			C4						
5								H5	
6							G6		
7	A7								
8	A8		C8						
9				D9	E9				

How many Easter eggs are there?

10

How many  Easter eggs are there?

0




















How many blanks are there?

71

Happy Easter from Math-Drills.Com!

Easter Egg Map (J)

What is the grid reference of each Easter egg?

	A	B	C	D	E	F	G	H	I
1									
2									
3									
4									
5									
6									
7									
8									
9									

How many Easter eggs are there?

How many  Easter eggs are there?

How many blanks are there?

Happy Easter from Math-Drills.Com!

Easter Egg Map (J) Answers

What is the grid reference of each Easter egg?

	A	B	C	D	E	F	G	H	I
1									
2						F2			I2
3	A3			D3					I3
4								H4	
5		B5				F5			
6	A6			D6			G6		
7		B7	C7			F7			I7
8	A8			D8		F8			
9							G9		

How many Easter eggs are there?

19

How many  Easter eggs are there?

3

How many blanks are there?

62

Happy Easter from Math-Drills.Com!