



# Easter Egg Ratios (A)

Find the Easter egg ratio for each set of eggs.


1.  :  =     :     :




2.  :  =     :     :



3.  :  =     :     :



4.  :  =     :     :




Bonus: Simplify each ratio if necessary.

Happy Easter from Math-Drills.Com!

# Easter Egg Ratios (A) Answers


Find the Easter egg ratio for each set of eggs.

1.  :  = 10 : 5






Simplified: 2 : 1

2.  :  = 16 : 9






Simplified: 16 : 9

3.  :  = 21 : 27



Simplified: 7 : 9

4.  :  = 20 : 16



Simplified: 5 : 4


Bonus: Simplify each ratio if necessary.

Happy Easter from Math-Drills.Com!

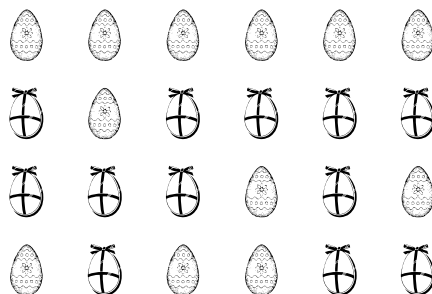
# Easter Egg Ratios (B)

Find the Easter egg ratio for each set of eggs.

1.  :  = : :




2.  :  = : :



3.  :  = : :



4.  :  = : :





Bonus: Simplify each ratio if necessary.

Happy Easter from Math-Drills.Com!



# Easter Egg Ratios (B) Answers


Find the Easter egg ratio for each set of eggs.

1.  :  = 17 : 15



Simplified: 17 : 15

2.  :  = 12 : 12




Simplified: 1 : 1

3.  :  = 13 : 15



Simplified: 13 : 15

4.  :  = 24 : 32



Simplified: 3 : 4

Bonus: Simplify each ratio if necessary.

Happy Easter from Math-Drills.Com!

# Easter Egg Ratios (C)

Find the Easter egg ratio for each set of eggs.

1.  :  =        :



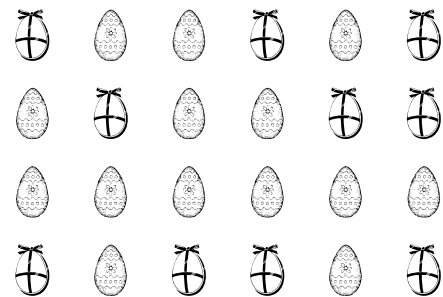
2.  :  =        :



3.  :  =        :



4.  :  =        :



Bonus: Simplify each ratio if necessary.

Happy Easter from Math-Drills.Com!



# Easter Egg Ratios (C) Answers

Find the Easter egg ratio for each set of eggs.

1.  :  = 23 : 17



Simplified: 23 : 17

2.  :  = 11 : 14





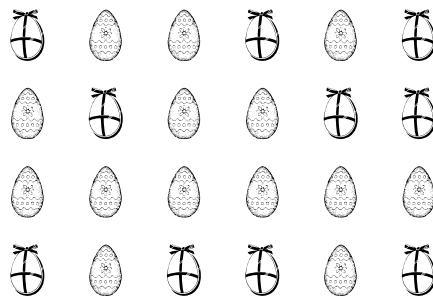
Simplified: 11 : 14

3.  :  = 8 : 1



Simplified: 8 : 1

4.  :  = 14 : 10



Simplified: 7 : 5


Bonus: Simplify each ratio if necessary.

Happy Easter from Math-Drills.Com!


# Easter Egg Ratios (D)

Find the Easter egg ratio for each set of eggs.

1.  :  =     :     




2.  :  =     :     



3.  :  =     :     



4.  :  =     :     






Bonus: Simplify each ratio if necessary.

Happy Easter from Math-Drills.Com!



# Easter Egg Ratios (D) Answers


Find the Easter egg ratio for each set of eggs.

1.  :  = 25 : 17



Simplified: 25 : 17

2.  :  = 12 : 12






Simplified: 1 : 1

3.  :  = 11 : 13



Simplified: 11 : 13

4.  :  = 20 : 22



Simplified: 10 : 11

Bonus: Simplify each ratio if necessary.


Happy Easter from Math-Drills.Com!




# Easter Egg Ratios (E)

Find the Easter egg ratio for each set of eggs.


1.  :  =     :     :




2.  :  =     :     :



3.  :  =     :     :



4.  :  =     :     :






Bonus: Simplify each ratio if necessary.

Happy Easter from Math-Drills.Com!



# Easter Egg Ratios (E) Answers


Find the Easter egg ratio for each set of eggs.

1.  :  = 13 : 11






Simplified: 13 : 11

2.  :  = 5 : 10






Simplified: 1 : 2

3.  :  = 23 : 33



Simplified: 23 : 33

4.  :  = 10 : 10



Simplified: 1 : 1

Bonus: Simplify each ratio if necessary.

Happy Easter from Math-Drills.Com!


# Easter Egg Ratios (F)

Find the Easter egg ratio for each set of eggs.


$$1. \text{ [Egg with wavy lines] : [Egg with diagonal stripes] = : }$$




$$2. \text{ [Egg with stars] : [Egg with diagonal stripes] = : }$$



$$3. \text{ [Egg with dots] : [Egg with a bow] = : }$$



$$4. \text{ [Egg with diagonal stripes] : [Egg with wavy lines] = : }$$



Bonus: Simplify each ratio if necessary.

Happy Easter from Math-Drills.Com!



# Easter Egg Ratios (F) Answers


Find the Easter egg ratio for each set of eggs.

1.  :  = 3 : 9






Simplified: 1 : 3

2.  :  = 17 : 18






Simplified: 17 : 18

3.  :  = 11 : 19



Simplified: 11 : 19

4.  :  = 20 : 20



Simplified: 1 : 1


Bonus: Simplify each ratio if necessary.

Happy Easter from Math-Drills.Com!


# Easter Egg Ratios (G)

Find the Easter egg ratio for each set of eggs.

1.  :  =      :




2.  :  =      :



3.  :  =      :



4.  :  =      :






Bonus: Simplify each ratio if necessary.

Happy Easter from Math-Drills.Com!



# Easter Egg Ratios (G) Answers


Find the Easter egg ratio for each set of eggs.

1.  :  = 16 : 14



Simplified: 8 : 7

2.  :  = 28 : 20






Simplified: 7 : 5

3.  :  = 23 : 17



Simplified: 23 : 17

4.  :  = 14 : 16



Simplified: 7 : 8

Bonus: Simplify each ratio if necessary.

Happy Easter from Math-Drills.Com!


# Easter Egg Ratios (H)

Find the Easter egg ratio for each set of eggs.


1.  :  = :




2.  :  = :



3.  :  = :



4.  :  = :



Bonus: Simplify each ratio if necessary.

Happy Easter from Math-Drills.Com!

# Easter Egg Ratios (H) Answers


Find the Easter egg ratio for each set of eggs.

1.  :  = 4 : 5






Simplified: 4 : 5

2.  :  = 15 : 9






Simplified: 5 : 3

3.  :  = 12 : 20



Simplified: 3 : 5

4.  :  = 18 : 17



Simplified: 18 : 17

Bonus: Simplify each ratio if necessary.


Happy Easter from Math-Drills.Com!




# Easter Egg Ratios (I)

Find the Easter egg ratio for each set of eggs.

1.  :  =     :     :



2.  :  =     :     :



3.  :  =     :     :



4.  :  =     :     :






Bonus: Simplify each ratio if necessary.

Happy Easter from Math-Drills.Com!



# Easter Egg Ratios (I) Answers


Find the Easter egg ratio for each set of eggs.

1.  :  = 25 : 31





Simplified: 25 : 31

2.  :  = 32 : 24





Simplified: 4 : 3

3.  :  = 27 : 21



Simplified: 9 : 7

4.  :  = 10 : 14



Simplified: 5 : 7


Bonus: Simplify each ratio if necessary.

Happy Easter from Math-Drills.Com!


# Easter Egg Ratios (J)

Find the Easter egg ratio for each set of eggs.


1.  :  =     :




2.  :  =     :



3.  :  =     :



4.  :  =     :




Bonus: Simplify each ratio if necessary.

Happy Easter from Math-Drills.Com!



# Easter Egg Ratios (J) Answers


Find the Easter egg ratio for each set of eggs.

1.  :  = 9 : 3




Simplified: 3 : 1

2.  :  = 23 : 33






Simplified: 23 : 33

3.  :  = 4 : 5



Simplified: 4 : 5

4.  :  = 9 : 11



Simplified: 9 : 11

Bonus: Simplify each ratio if necessary.

Happy Easter from Math-Drills.Com!